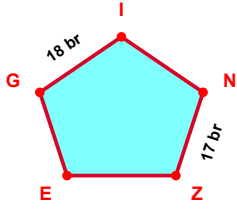
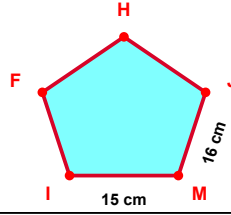


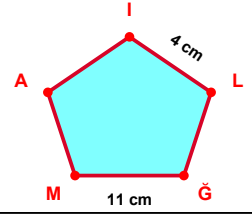
SORU: Aşağıdaki şekillerde verilen, kenar uzunlukları farklarını bulunuz.



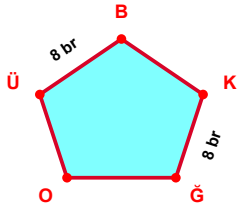
$$|IG| - |ZN| = \dots\dots$$



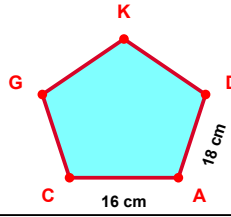
$$|MJ| - |IM| = \dots\dots$$



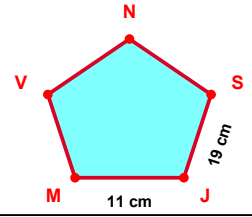
$$|M\check{G}| - |LI| = \dots\dots$$



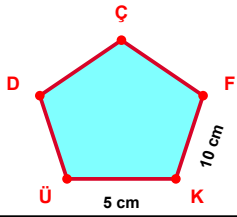
$$|\check{G}K| - |B\check{U}| = \dots\dots$$



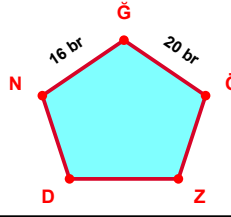
$$|AD| - |CA| = \dots\dots$$



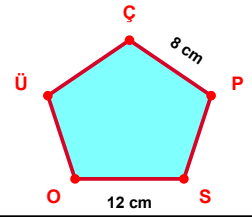
$$|JS| - |MJ| = \dots\dots$$



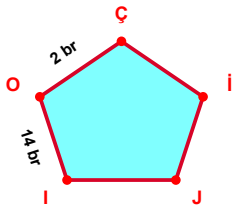
$$|KF| - |\check{U}K| = \dots\dots$$



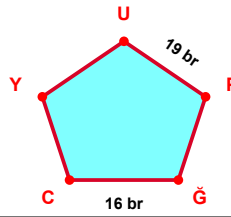
$$|\check{O}\check{G}| - |\check{G}N| = \dots\dots$$



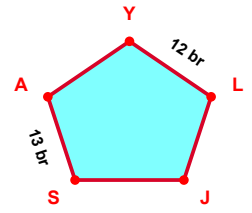
$$|OS| - |P\check{C}| = \dots\dots$$



$$|OI| - |C\check{O}| = \dots\dots$$

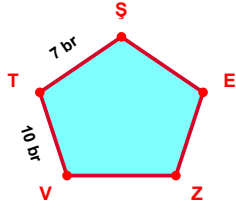


$$|PU| - |C\check{G}| = \dots\dots$$

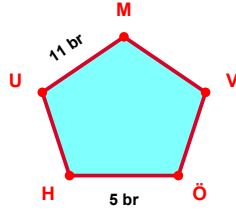


$$|AS| - |LY| = \dots\dots$$

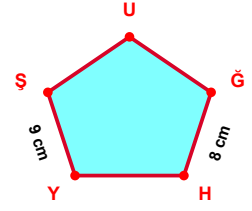
SORU: Aşağıdaki şekillerde verilen, kenar uzunlukları farklarını bulunuz.



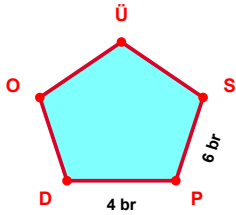
$$|TV| - |ŞT| = \dots\dots$$



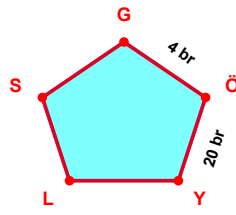
$$|MU| - |HÖ| = \dots\dots$$



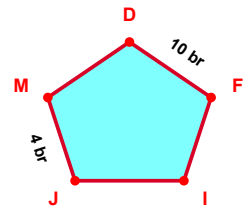
$$|ŞY| - |HĞ| = \dots\dots$$



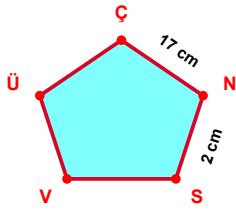
$$|PS| - |DP| = \dots\dots$$



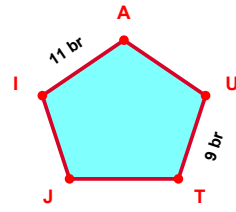
$$|YÖ| - |ÖG| = \dots\dots$$



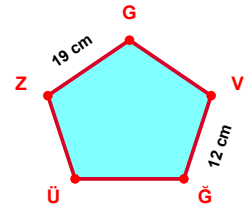
$$|FD| - |MJ| = \dots\dots$$



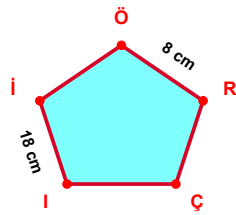
$$|NÇ| - |SN| = \dots\dots$$



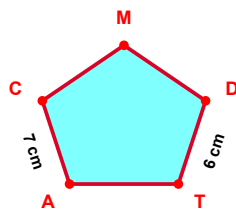
$$|AI| - |TU| = \dots\dots$$



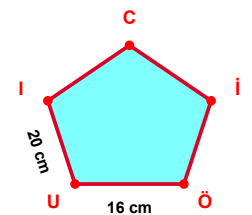
$$|GZ| - |ĞV| = \dots\dots$$



$$|İİ| - |RÖ| = \dots\dots$$



$$|CA| - |TD| = \dots\dots$$



$$|IU| - |UÖ| = \dots\dots$$

SÜREÇ ODAKLI DEĞERLENDİRME ÖLÇEĞİ

Doğru Sayısı: / 24

Öğretmen ilgili kutucuğu işaretler.

Geliştirilmeli (0-8)

İyi (9-14)

Çok İyi (15-20)

Mükemmel (21-24)

☐
☐
☐
☐

Hazırlayan:

Bu bölüme sınıfınızın ilgili kazanıma yönelik genel durumuna ilişkin gözlem ve izlenimlerinizi, öğrencilerinizin bu kazanımla ilgili öğrenme eksikliklerini ve bu eksikliklerin giderilmesi amacıyla yaptığınız/yapmayı planladığınız faaliyetleri not edebilirsiniz.

No	Adı - Soyadı	Toplam Puan	Değerlendirme
1			
2			
3			
4			
5			
6			
7			
8			
9			
10			
11			
12			
13			
14			
15			
16			
17			
18			
19			
20			
21			
22			
23			
24			
25			
26			
27			
28			
29			
30			
31			
32			
33			
34			
35			

Hazırlayan: